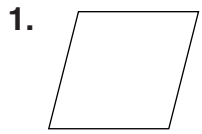
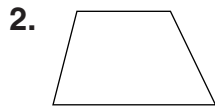
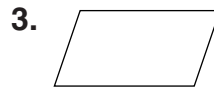


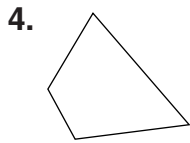
LESSON
7-6 **Practice B**
Quadrilaterals


Give the most descriptive name for each figure.













Complete each statement.

7. All rectangles are also _____.
8. A rhombus is sometimes a _____.
9. All trapezoids are also _____.
10. A _____ is any plane figure with four straight sides and four angles.
11. A quadrilateral with two sets of parallel lines, but does not have 90° angles is called a _____.
12. Devon made a table top in the shape of a quadrilateral. All of its angles measure 90° . What could the shape of Devon's table top be?

13. The perimeter of a rhombus is 64 inches. What is the length of each side of the rhombus? Explain.

14. Explain why a trapezoid is a quadrilateral, but a quadrilateral is not always a trapezoid.

