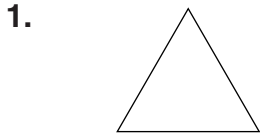
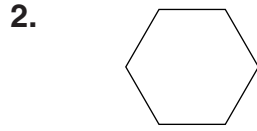
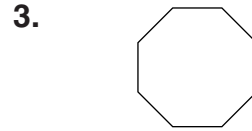


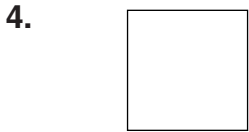
LESSON
7-7 **Practice A**
Polygons

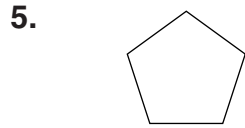
Name each polygon.





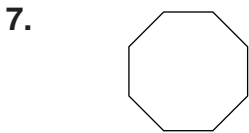


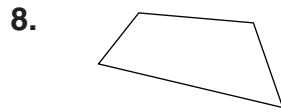


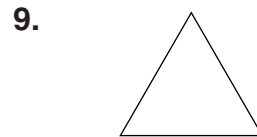




Tell whether each polygon appears to be *regular* or *not regular*.







10. What is another name for a regular triangle?

11. What is another name for a regular quadrilateral with four right angles?

12. One side of a regular pentagon measures 4 inches. What is the total length of the sides of that pentagon?

13. The total length of the sides of a regular octagon is 24 inches. What is the length of each side?
